

Addition Word Problem Challenge Cards



Addition Word Problem Challenge Cards



If you had 10 glass bottles and 3 plastic bottles, how many bottles are there altogether?



Answer:

Addition Word Problem Challenge Cards



If you had 5 milkshakes and 2 fizzy drinks, how many drinks do you have in total?




Answer:

Addition Word Problem Challenge Cards



If you had 14 squares of chocolate and 5 chocolate fingers, how many do you have in total?




Answer:

Addition Word Problem Challenge Cards



If you have 5 blackbirds and 9 robins in your garden, how many are there?



Answer:

Addition Word Problem Challenge Cards



If you had 5 books and 6 magazines, how many do you have?



Answer:

Addition Word Problem Challenge Cards



If you had 5 cherry cakes and 5 plain cakes, how many would you have altogether?

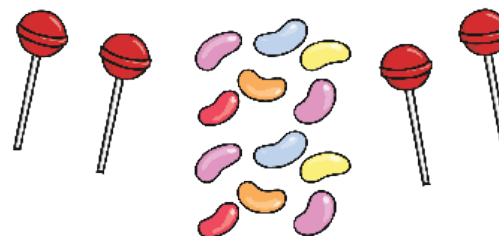


Answer:

Addition Word Problem Challenge Cards




If you had 12 jelly beans and 4 lollipops, how many would you have in total?



Answer:




If you had 8 hotdogs and 3 portions of chips, how many would you have altogether?



Answer:




If you had 3 marbles and 2 dice, how many do you have in total?



Answer:



If you had 4 apples and 3 pears, how many do you have?



Answer:




If you had 8 milk cartons and 9 juice cartons, how many would you have altogether?




Answer:



If you have 10 boiled eggs and 6 fried eggs, how many would you have in total?



Answer:



If you had 10 glass bottles and 3 plastic bottles, how many bottles are there altogether?

$$10 + 3 = 13$$

There are 13 bottles altogether.

If you had 5 milkshakes and 2 fizzy drinks, how many drinks do you have in total?

$$5 + 2 = 7$$

There are 7 drinks in total.

If you had 14 squares of chocolate and 5 chocolate fingers, how many do you have in total?

$$14 + 5 = 19$$

There are 19 in total.

If you have 5 blackbirds and 9 robins in your garden, how many are there?

$$5 + 9 = 14$$

There are 14 birds.

If you had 5 cherry cakes and 5 plain cakes, how many would you have altogether?

$$5 + 5 = 10$$

There are 10 cakes altogether.

If you had 5 books and 6 magazines, how many do you have?

$$5 + 6 = 11$$

There are 11 books altogether.

If you had 12 jelly beans and 4 lollipops, how many would you have in total?

$$12 + 4 = 16$$

There are 16 in total.

If you had 8 hotdogs and 3 portions of chips, how many would you have altogether?

$$8 + 3 = 11$$

There are 11 altogether.

If you had 3 marbles and 2 dice, how many do you have in total?

$$3 + 2 = 5$$

There are 5 in total.

If you had 4 apples and 3 pears, how many do you have?

$$4 + 3 = 7$$

There are 7 pieces of fruit.

If you had 8 milk cartons and 9 juice cartons, how many would you have altogether?

$$8 + 9 = 17$$

There are 17 cartons altogether.

If you have 10 boiled eggs and 6 fried eggs, how many would you have in total?

$$10 + 6 = 16$$

There are 16 eggs in total.