

7

How many pencils does Molly have?



Jack: I have 8 pencils.

Molly: I have 4 more pencils than Jack.

\_\_\_\_\_ pencils

8

Match each coin to the correct box. One has been done for you.

Less Than 	More Than 

Coins in the center: 1p, 2p, 5p, 10p (with arrow pointing to the 'More Than' box), 20p, 50p.

9

On these cards, the word should match the number. One of these cards is wrong. Draw a cross on the card that is wrong.

13

thirteen

18

eighty

29


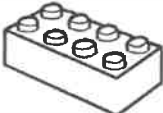


twenty-nine

31




thirty-one

10

Anisha makes a tally chart of her toys.

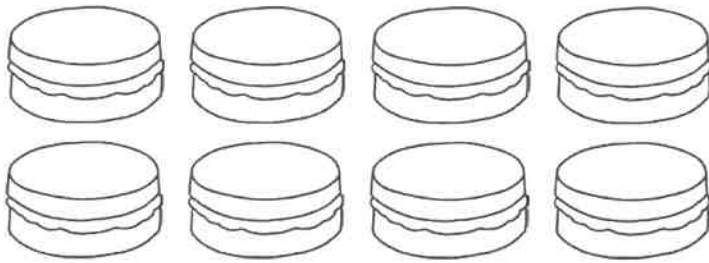
Toys In My Box	Tally
	
	
	
	

Tick **one** box below that shows all of Anisha's toys.



11

There are **20** cakes. **8** cakes are eaten.  
How many cakes are left?



cakes

12

Tick the **two** sentences that are correct.

Tick **two**.

A circle has one side.

A circle has straight sides.

A circle has no corners.

A circle has three sides.

13

Write two numbers to make this calculation correct.


$$\square + \square = 17$$

Now, write three numbers to make this calculation correct.

$$\square + \square + \square = 17$$

14


Abdul has some toy dinosaurs. He gives half of them to Max.  
He has three toy dinosaurs left.  
How many toy dinosaurs did Abdul start with?



toy dinosaurs

15

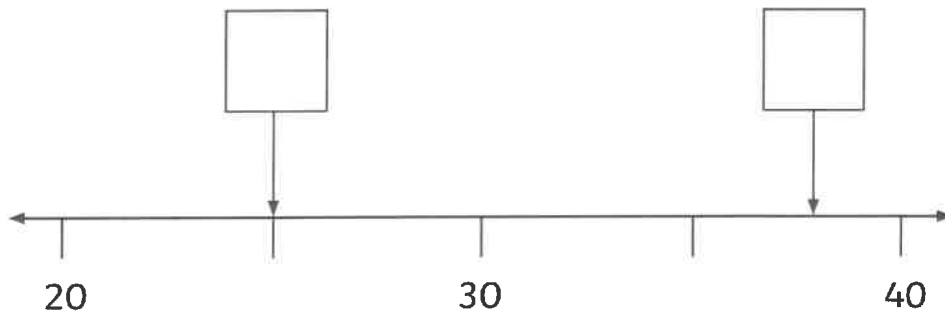
Anisha has these coins in her piggy bank.  
How much money does she have?



p

16

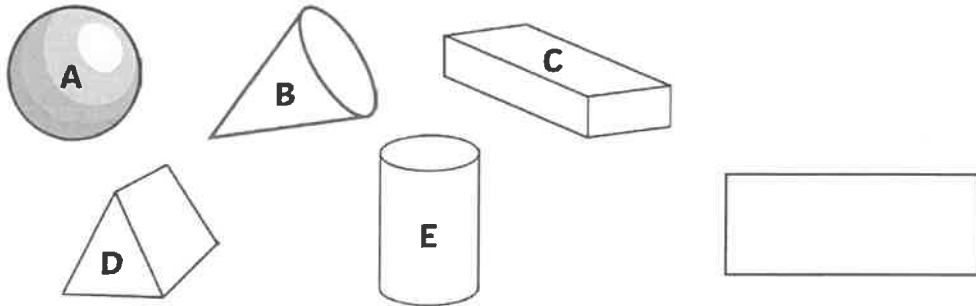
Write the correct number in each box.



17

Which shape has 3 faces?

Write the letter.



18

Callum and Ahmed share these biscuits equally.

How many biscuits do they each get?

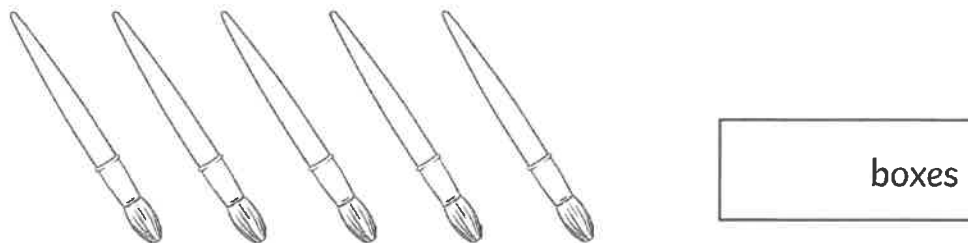


19

Mrs Jones needs 25 paintbrushes for her class.

There are 5 paintbrushes in each box.

How many boxes of paintbrushes does Mrs Jones need altogether?



There are 24 children in Gold Class. Half of them are girls.  
How many are boys?

Molly has some pens. She gives half of them to Chloe. Molly has 6 pens left.  
How many did she start with?

Jack has saved £12. He spends  $\frac{1}{4}$  of his money on a new toy car.  
How much does the car cost? How much does Jack have left?

My cake recipe says I need 60ml of milk. I have to add  $\frac{1}{3}$  of the milk to the mixture. How much do I need to add?

Kim has a piece of ribbon, which is 28cm long. She cuts  $\frac{3}{4}$  of it off.  
How long are her two pieces of ribbon?

Complete these number sentences. The first one has been done for you.

$$30 + 5 = 20 + \boxed{15}$$

$$40 + 6 = 30 + \boxed{\phantom{00}}$$

$$60 + 1 = 40 + \boxed{\phantom{00}}$$

$$90 + 2 = 50 + \boxed{\phantom{00}}$$

$$20 + 7 = \boxed{\phantom{00}} + 17$$

$$50 + 8 = \boxed{\phantom{00}} + 28$$

$$70 + 4 = \boxed{\phantom{00}} + 54$$

Now, match the sums that have the same answer.

$$30 + 8$$

$$50 + 18$$

$$70 + 8$$

$$30 + 18$$

$$60 + 8$$

$$20 + 18$$

$$40 + 8$$

$$60 + 18$$